

Kindergarten math test

Name _____


Date: _____

Solve the following problems

1. Write the missing numbers

2, ____, ____, 5, ____, 7, ____, 9, ____

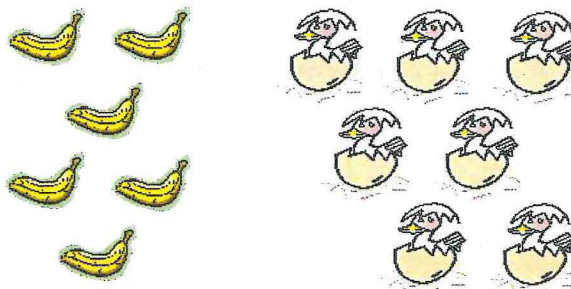
2. Circle 8 mice



3. Write the missing numbers

12, 10, ____, 6, ____, 2, 0

4. Count the bananas. Count the ducks. Then, write how many



5. Draw a square in the space below:

6. Draw a triangle in the space below:

7. Put an X on the circle. Color the triangle red. Scribble over the rectangle. Shade the triangle



8. Days of the week

How many days are there in a week? _____

If today is Monday, what day will it be in 3 days? _____ How about 6 days _____

9. How many cents are there in one dime?

A. 10 cents B. 15 cents C. 20 cents D. 5

10. Peter gave 3 jelly beans to his friend James and ate 4. How many jelly beans did Peter have? _____

11. Look at the figure below.

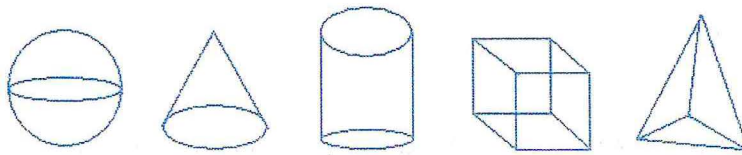
Color the cone green.

Color the sphere black

Color cube yellow

Color the cylinder blue

Color the pyramid a color of your choice



12. Look at the rectangle below.

Write L on the left side of the rectangle
Write R on the right side of the rectangle
Write an X inside the rectangle




13. Which animal is heavier? Write your answer in the space provided.

A lion or a mouse? _____


14. Which animal is taller? Write your answer in the space provided.

A horse or a giraffe? _____

15. Cross out the moon that does not belong.



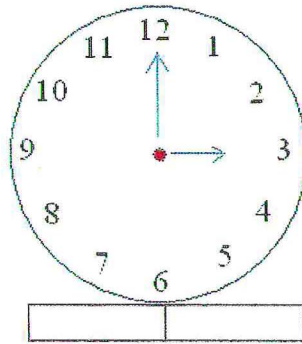
16. Cross out the shape that does not belong.



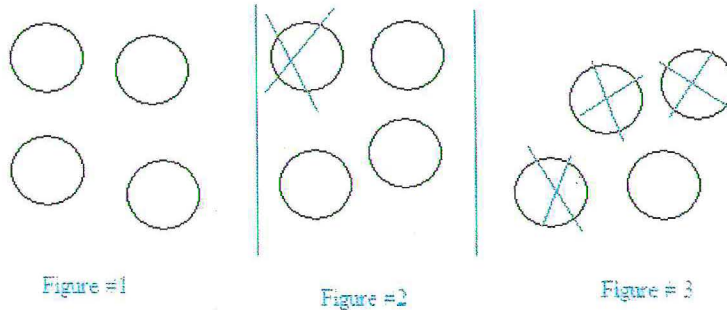
17. Color half of the shapes below:



18. What time is it?



19. You have 4 circles and you give away 3 to your best friends. Which figure shows the correct solution



20. What is the measure of the length shown in red below?

